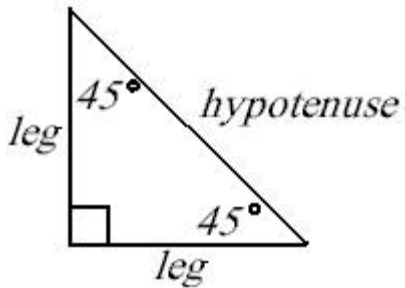


Name \_\_\_\_\_

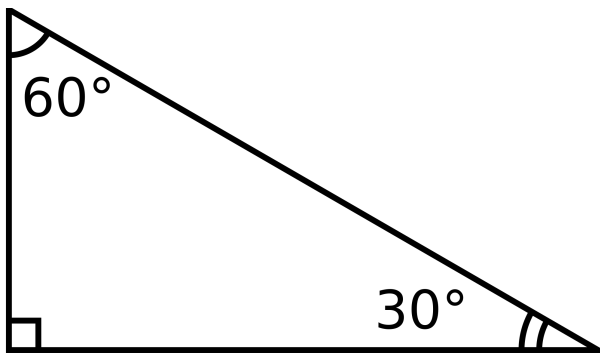
Hour \_\_\_\_\_ Date \_\_\_\_\_

# Assignment 8.3

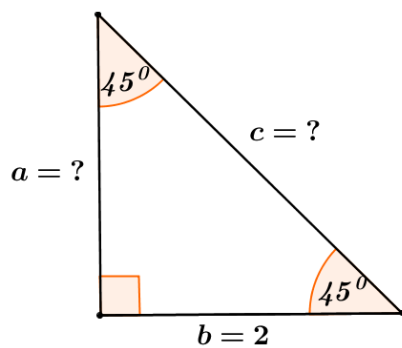
1. Label the 45-45-90 triangles correctly.



2. Label the 30-60-90 triangle correctly.



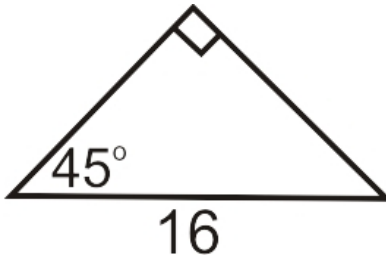
3. Find the measure of  $a$  and find the measure of  $c$ .



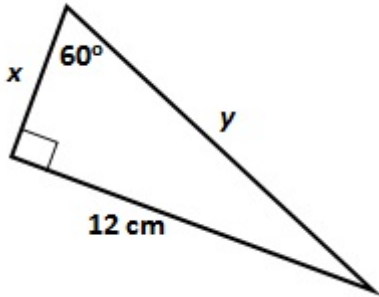
Name \_\_\_\_\_

Hour \_\_\_\_\_ Date \_\_\_\_\_

4. Find the measure of the legs.



5. Find the values of  $x$  and  $y$ .



6. Find the value of  $b$  and  $c$ .

